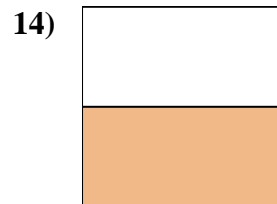
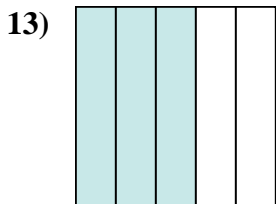
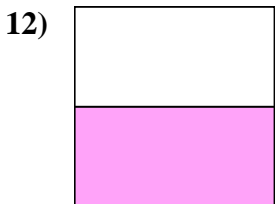
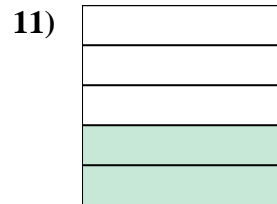
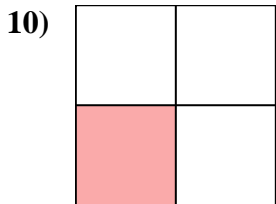
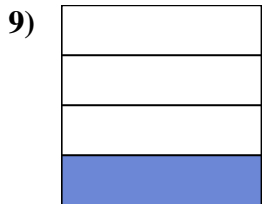
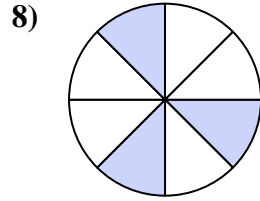
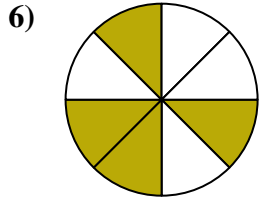
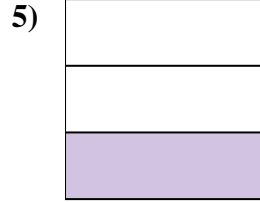
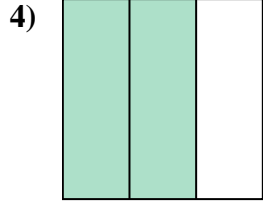
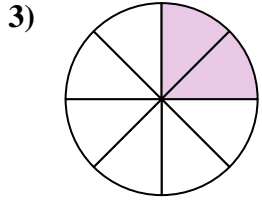
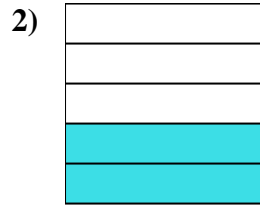
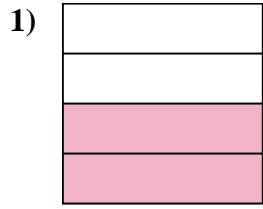
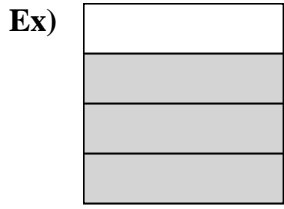




Write the shaded amount in word form.



Answers

Ex. three-fourths

1. _____

2. _____

3. _____

4. _____

5. _____

6. _____

7. _____

8. _____

9. _____

10. _____

11. _____

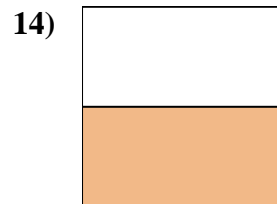
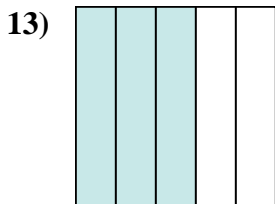
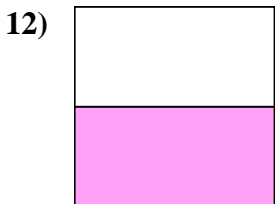
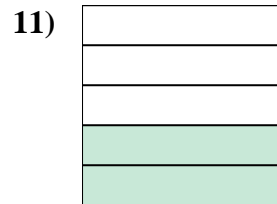
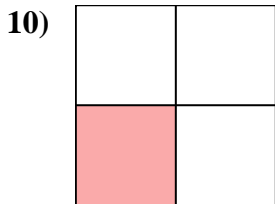
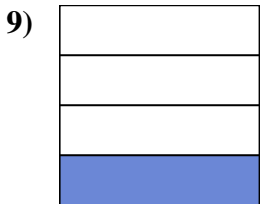
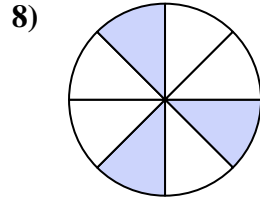
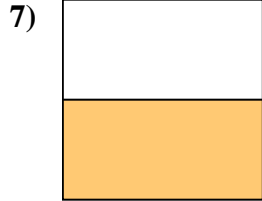
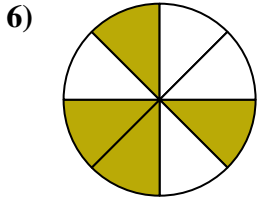
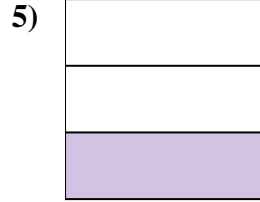
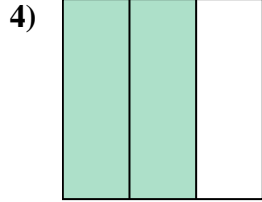
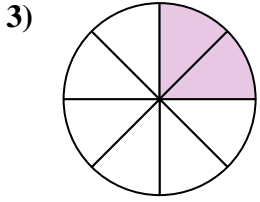
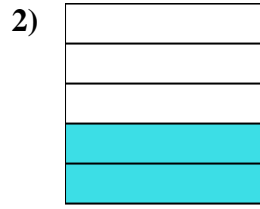
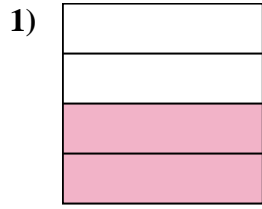
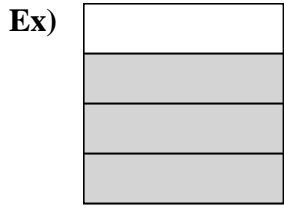
12. _____

13. _____

14. _____



Write the shaded amount in word form.



Answers

Ex. three-fourths

1. two-fourths

2. two-fifths

3. two-eighths

4. two-thirds

5. one-third

6. four-eighths

7. one-half

8. three-eighths

9. one-fourth

10. one-third

11. two-fifths

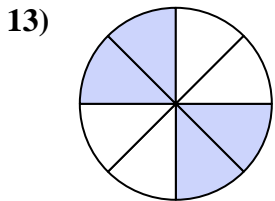
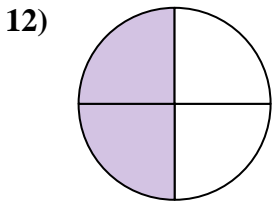
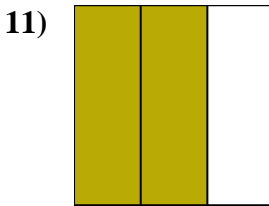
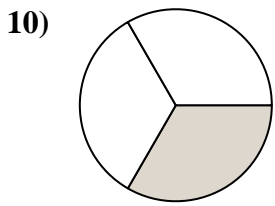
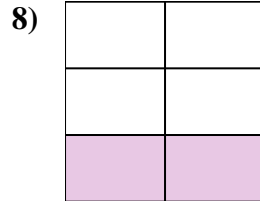
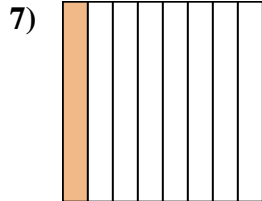
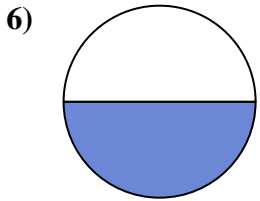
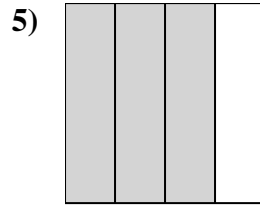
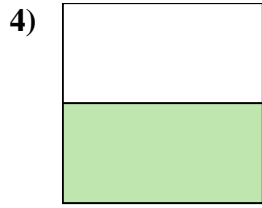
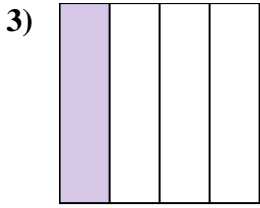
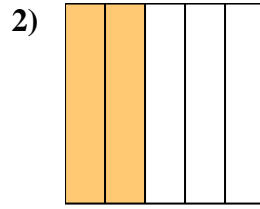
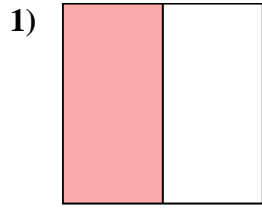
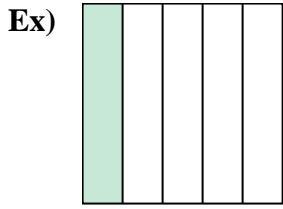
12. one-half

13. three-fifths

14. one-half



Write the shaded amount in word form.



Answers

Ex. one-fifth

1. _____

2. _____

3. _____

4. _____

5. _____

6. _____

7. _____

8. _____

9. _____

10. _____

11. _____

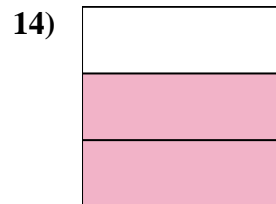
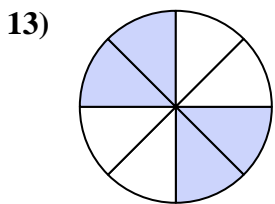
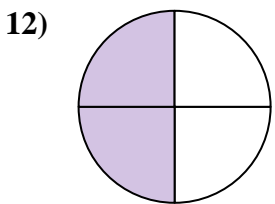
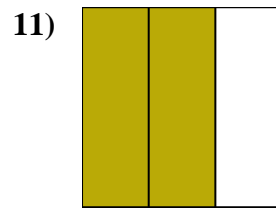
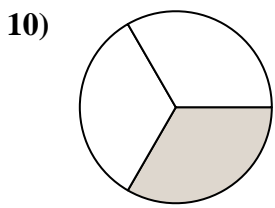
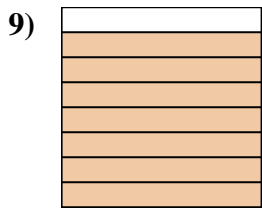
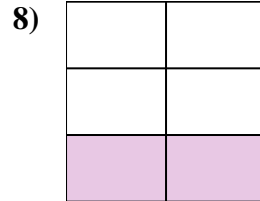
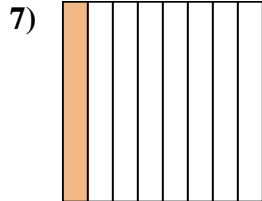
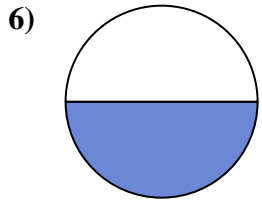
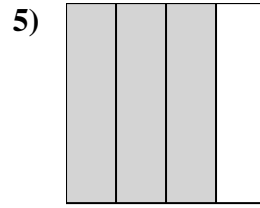
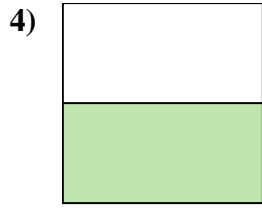
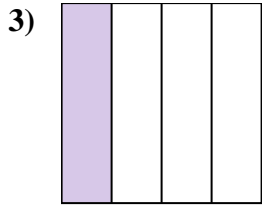
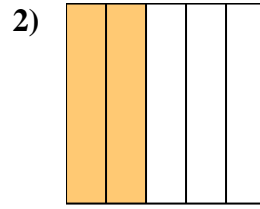
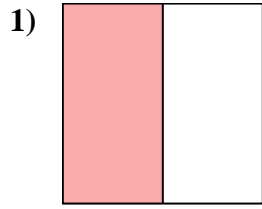
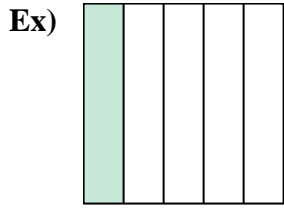
12. _____

13. _____

14. _____



Write the shaded amount in word form.



Answers

Ex. one-fifth

1. one-half

2. two-fifths

3. one-fourth

4. one-half

5. three-fourths

6. one-half

7. one-eighth

8. two-fifths

9. seven-eighths

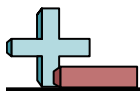
10. one-third

11. two-thirds

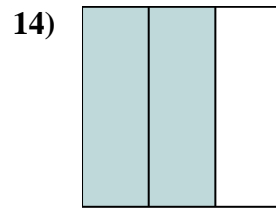
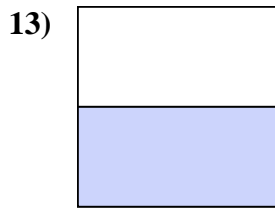
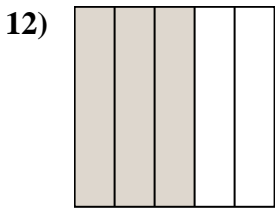
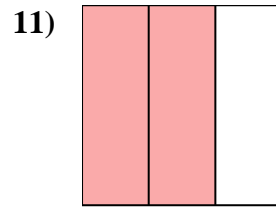
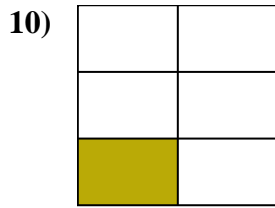
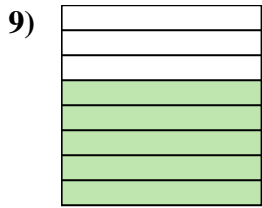
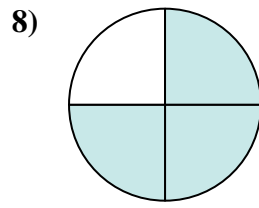
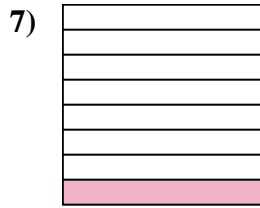
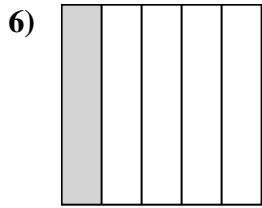
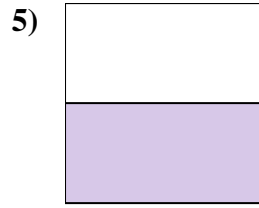
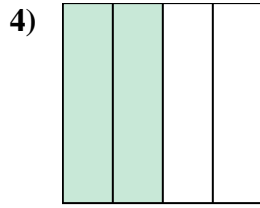
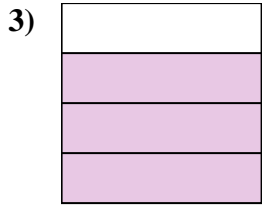
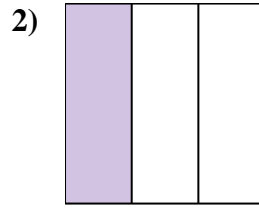
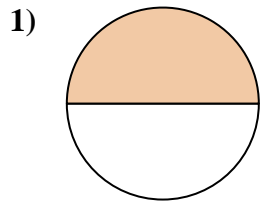
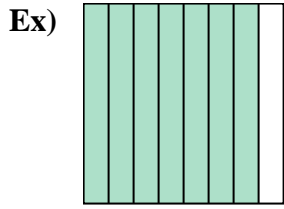
12. two-fourths

13. four-eighths

14. two-thirds



Write the shaded amount in word form.



Answers

Ex. seven-eighths

1. _____

2. _____

3. _____

4. _____

5. _____

6. _____

7. _____

8. _____

9. _____

10. _____

11. _____

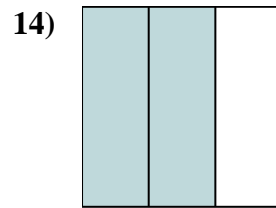
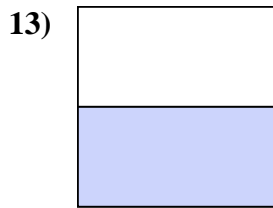
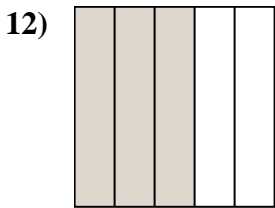
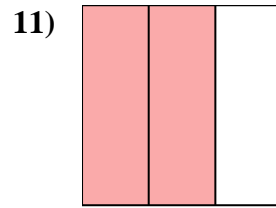
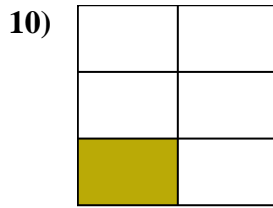
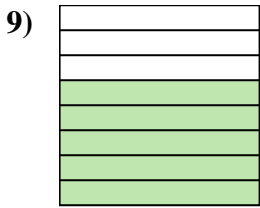
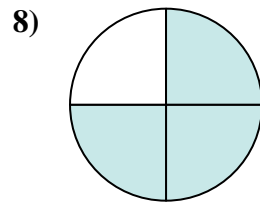
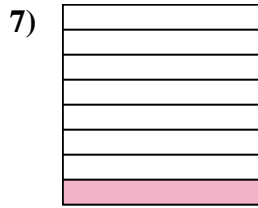
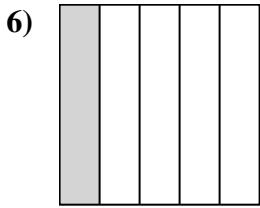
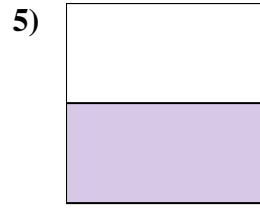
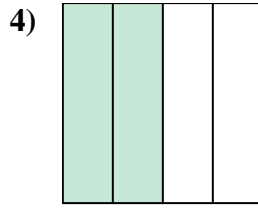
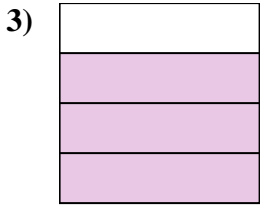
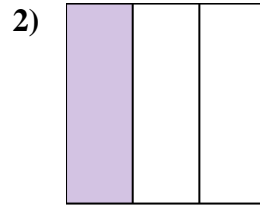
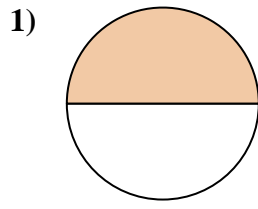
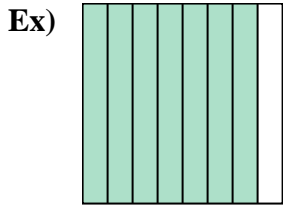
12. _____

13. _____

14. _____



Write the shaded amount in word form.



Answers

Ex. seven-eighths

1. one-half

2. one-third

3. three-fourths

4. two-fourths

5. one-half

6. one-fifth

7. one-eighth

8. three-fourths

9. five-eighths

10. one-fifth

11. two-thirds

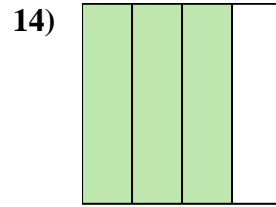
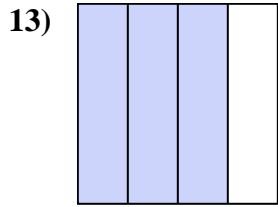
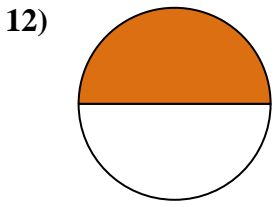
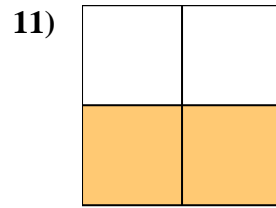
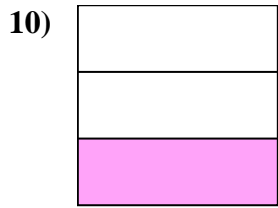
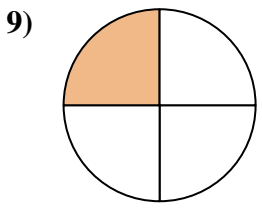
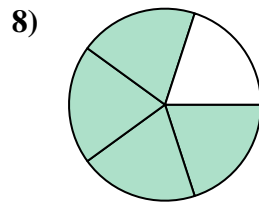
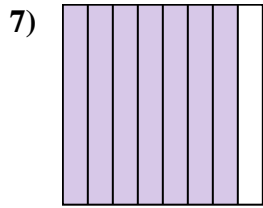
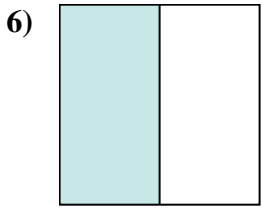
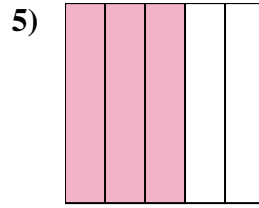
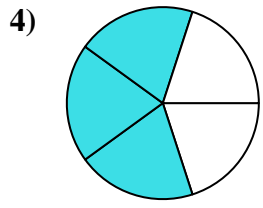
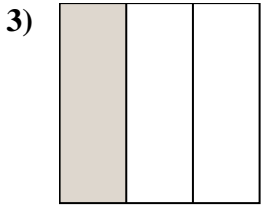
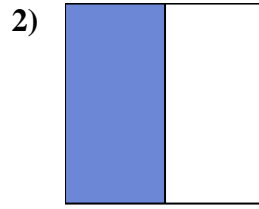
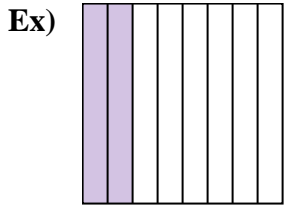
12. three-fifths

13. one-half

14. two-thirds



Write the shaded amount in word form.



Answers

Ex. two-eighths

1. _____

2. _____

3. _____

4. _____

5. _____

6. _____

7. _____

8. _____

9. _____

10. _____

11. _____

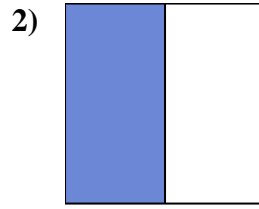
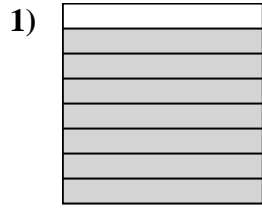
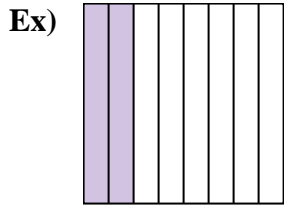
12. _____

13. _____

14. _____



Write the shaded amount in word form.



Answers

Ex. two-eighths

1. seven-eighths

2. one-half

3. one-third

4. three-fifths

5. three-fifths

6. one-half

7. seven-eighths

8. four-fifths

9. one-fourth

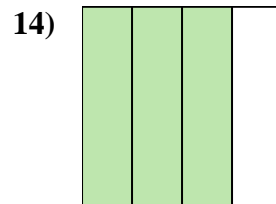
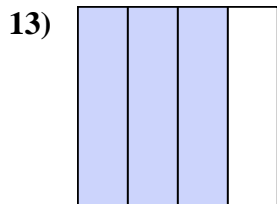
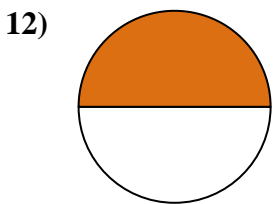
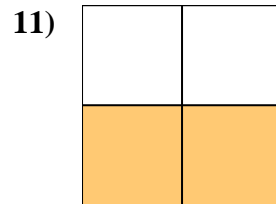
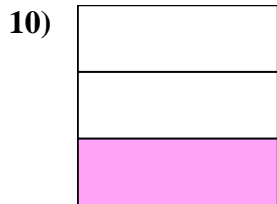
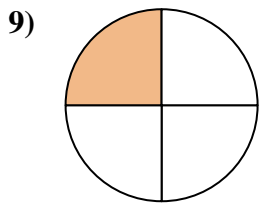
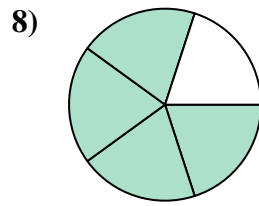
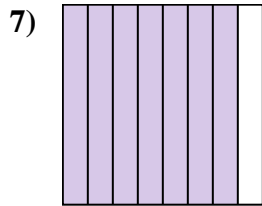
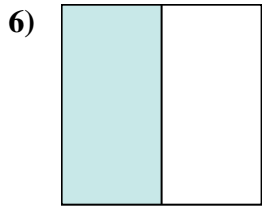
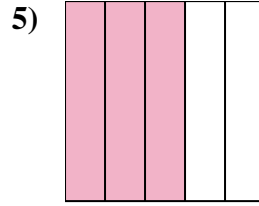
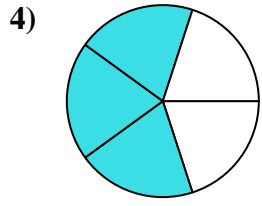
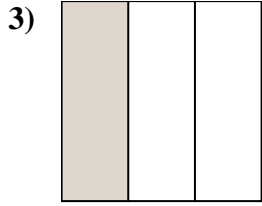
10. one-third

11. two-thirds

12. one-half

13. three-fourths

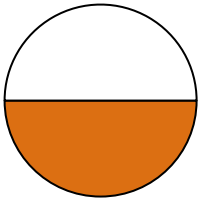
14. three-fourths



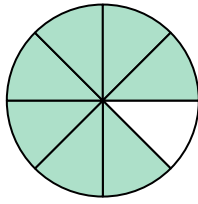


Write the shaded amount in word form.

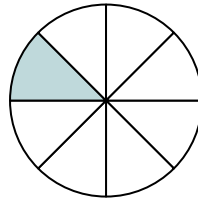
Ex)



1)



2)



Answers

Ex. one-half

1. _____

2. _____

3. _____

4. _____

5. _____

6. _____

7. _____

8. _____

9. _____

10. _____


11. _____

12. _____

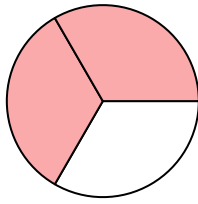
13. _____

14. _____


3)




4)



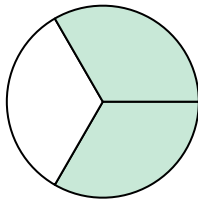
5)




6)



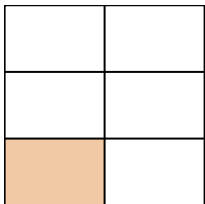
7)




8)




9)



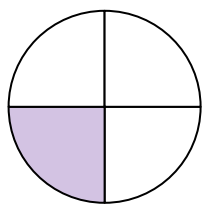
10)




11)



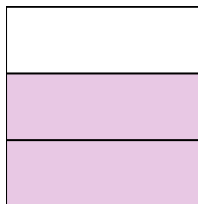
12)



13)



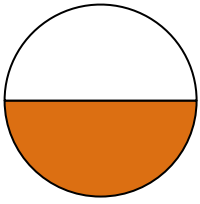
14)



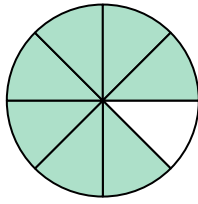


Write the shaded amount in word form.

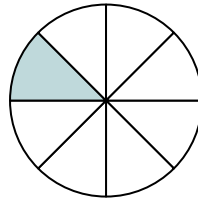
Ex)



1)



2)



Answers

Ex. one-half

1. seven-eighths

2. one-eighth

3. three-fourths

4. two-thirds

5. one-half

6. one-half

7. two-thirds

8. four-fifths

9. one-fifth

10. one-fifth


11. one-eighth

12. one-fourth

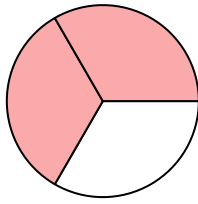
13. three-fourths

14. two-thirds


3)




4)



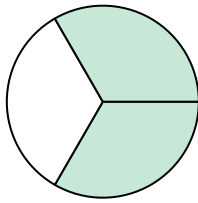
5)




6)



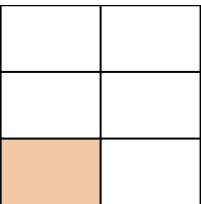
7)




8)




9)



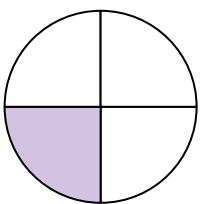
10)




11)



12)



13)

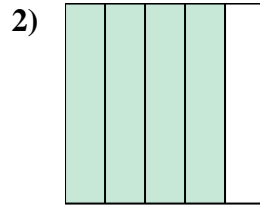
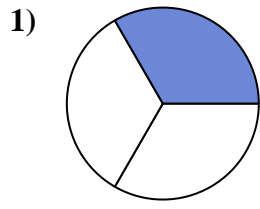
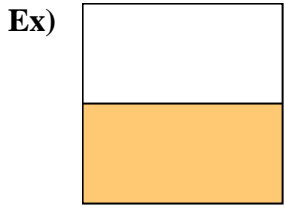


14)





Write the shaded amount in word form.



Answers

Ex. one-half

1. _____

2. _____

3. _____

4. _____

5. _____

6. _____

7. _____

8. _____

9. _____

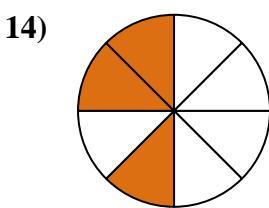
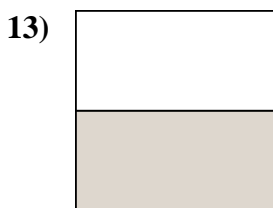
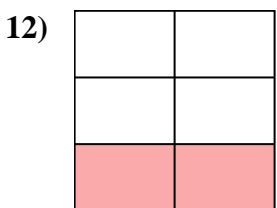
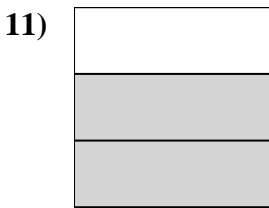
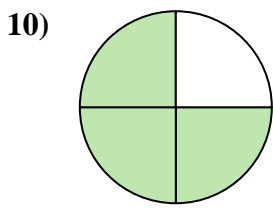
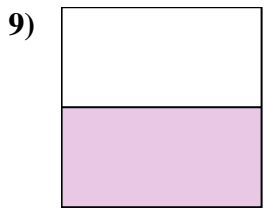
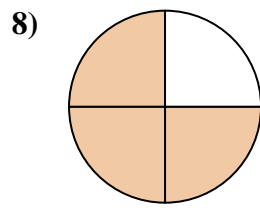
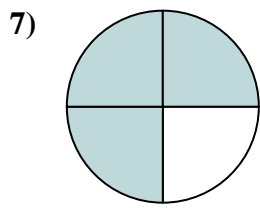
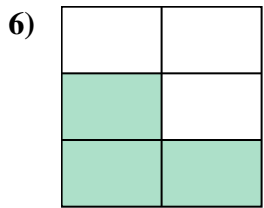
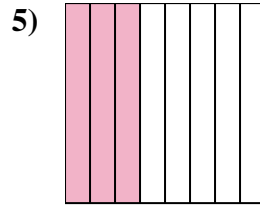
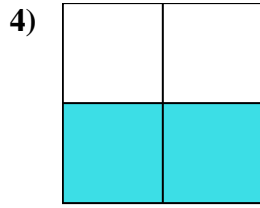
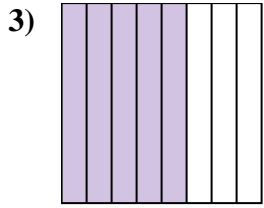
10. _____

11. _____

12. _____

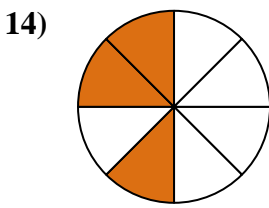
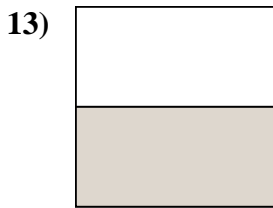
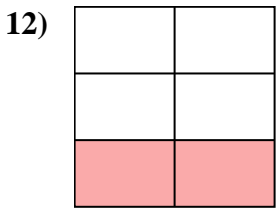
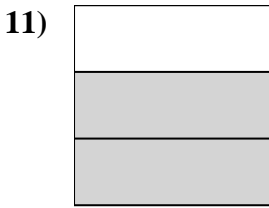
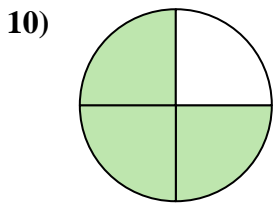
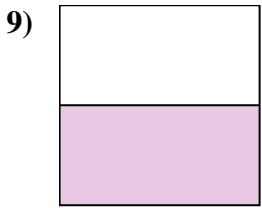
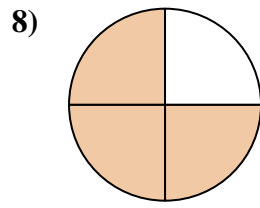
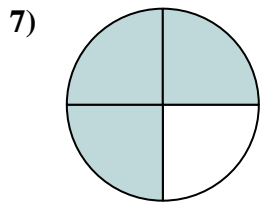
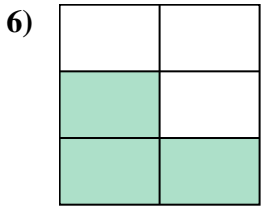
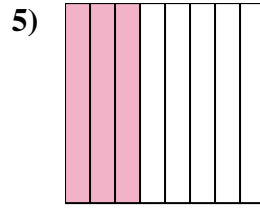
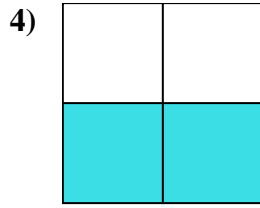
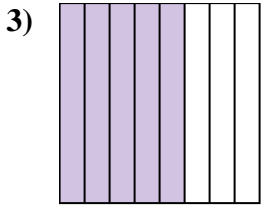
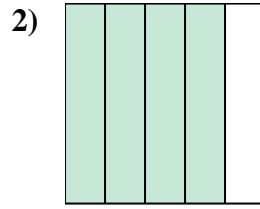
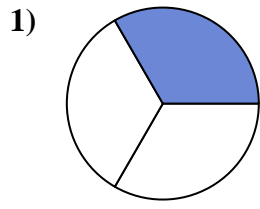
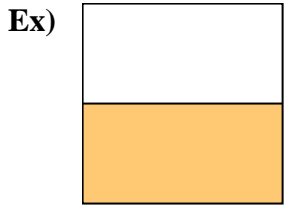
13. _____

14. _____





Write the shaded amount in word form.



Answers

Ex. one-half

1. one-third

2. four-fifths

3. five-eighths

4. two-thirds

5. three-eighths

6. three-fifths

7. three-fourths

8. three-fourths

9. one-half

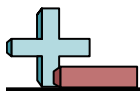
10. three-fourths

11. two-thirds

12. two-fifths

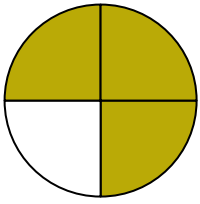
13. one-half

14. three-eighths




Write the shaded amount in word form.

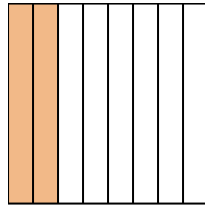
Ex)



1)



2)



Answers

Ex. three-fourths

1. _____

2. _____

3. _____

4. _____

5. _____

6. _____

7. _____

8. _____

9. _____

10. _____

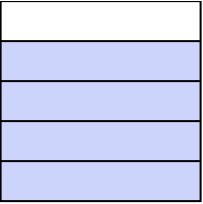
11. _____

12. _____

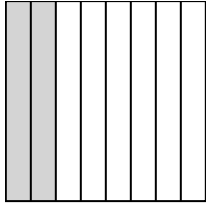
13. _____

14. _____

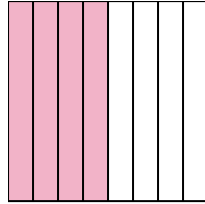
3)



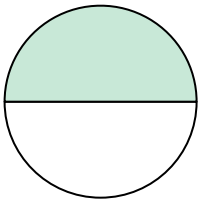
4)




5)



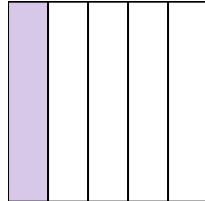
6)



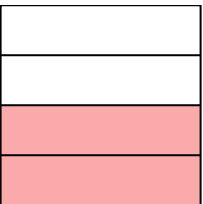
7)




8)



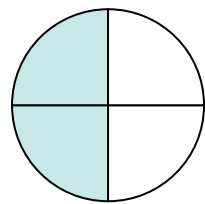
9)



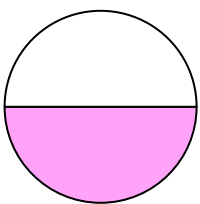
10)



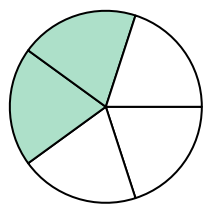
11)



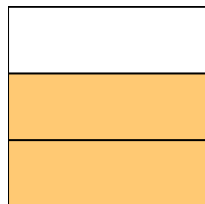
12)



13)



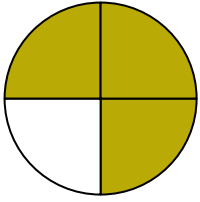
14)






Write the shaded amount in word form.

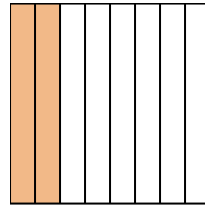
Ex)



1)



2)



Ex. three-fourths

1. one-third

2. two-eighths

3. four-fifths

4. two-eighths

5. four-eighths

6. one-half

7. one-third

8. one-fifth

9. two-fourths

10. one-half

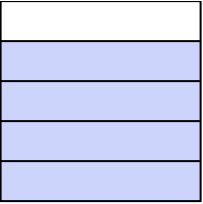
11. two-fourths

12. one-half

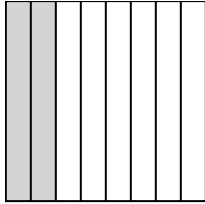
13. two-fifths

14. two-thirds

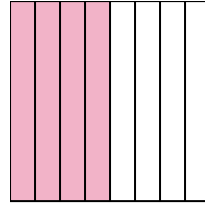
3)



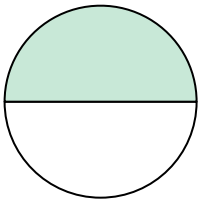
4)




5)



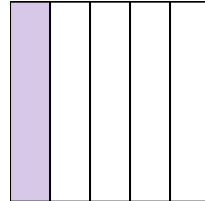
6)



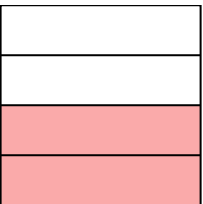
7)




8)



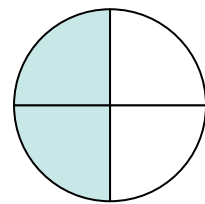
9)



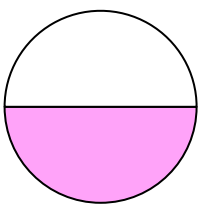
10)



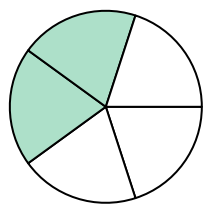
11)



12)



13)



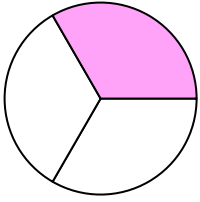
14)



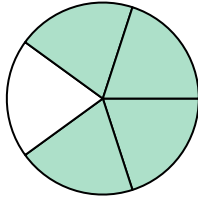


Write the shaded amount in word form.

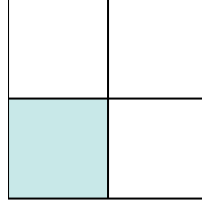
Ex)



1)



2)



Answers

Ex. one-third

1. _____

2. _____

3. _____

4. _____

5. _____

6. _____

7. _____

8. _____

9. _____

10. _____

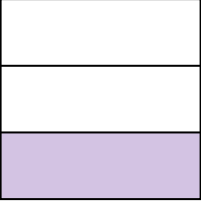
11. _____

12. _____


13. _____

14. _____

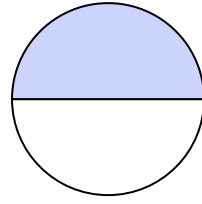
3)



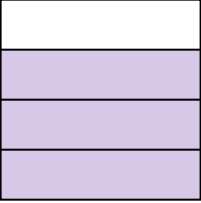
4)



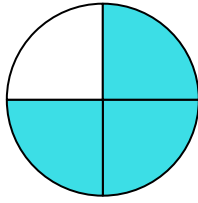
5)



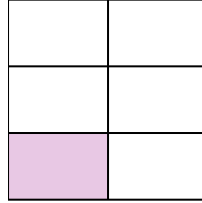
6)




7)



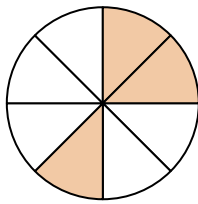
8)



9)



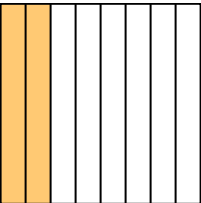
10)



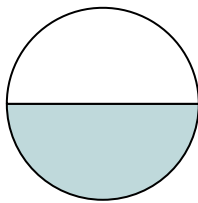
11)



12)



13)



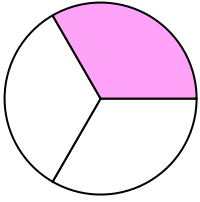
14)



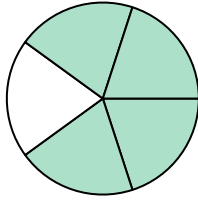


Write the shaded amount in word form.

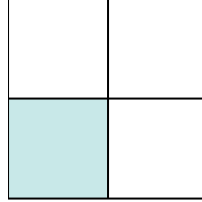
Ex)



1)



2)



Answers

Ex. one-third

1. four-fifths

2. one-third

3. one-third

4. three-fifths

5. one-half

6. three-fourths

7. three-fourths

8. one-fifth

9. six-eighths

10. three-eighths

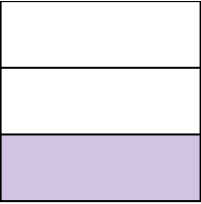
11. one-half

12. two-eighths


13. one-half

14. one-fourth

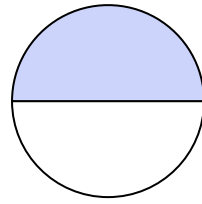
3)




4)



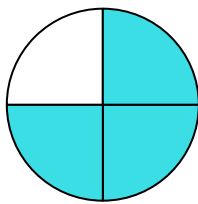
5)



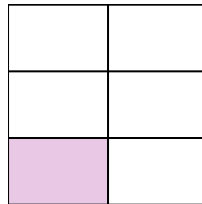
6)



7)



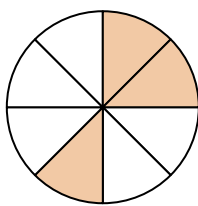
8)




9)



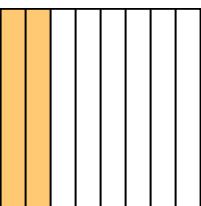
10)



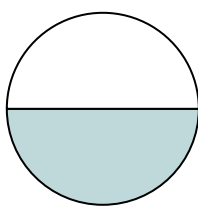
11)




12)



13)

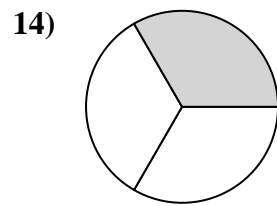
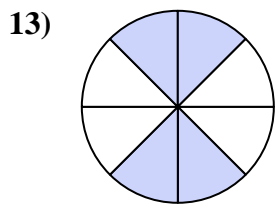
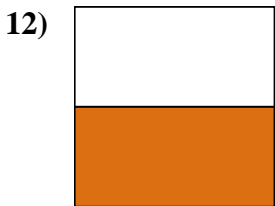
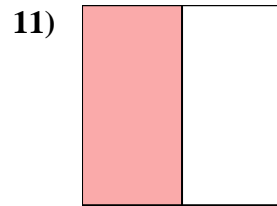
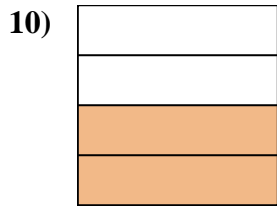
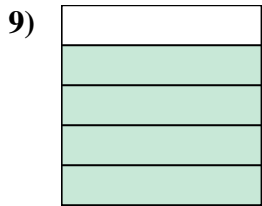
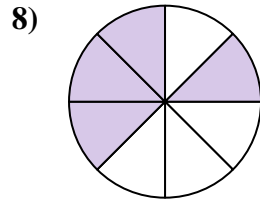
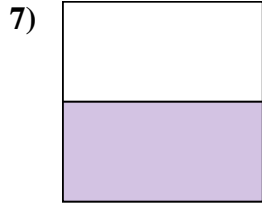
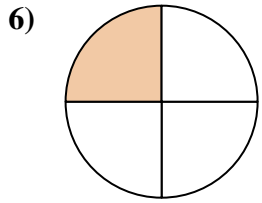
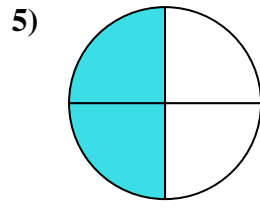
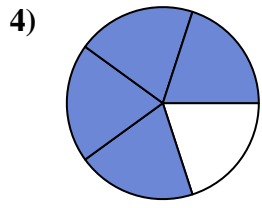
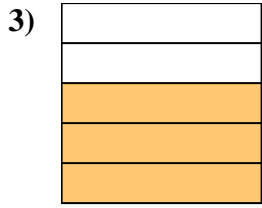
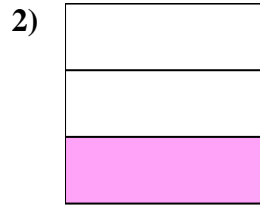
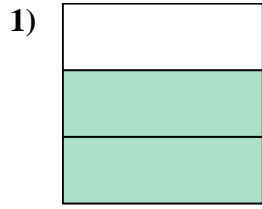
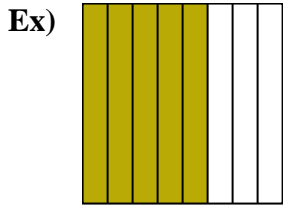


14)





Write the shaded amount in word form.



Answers

Ex. five-eighths

1. _____

2. _____

3. _____

4. _____

5. _____

6. _____

7. _____

8. _____

9. _____

10. _____

11. _____

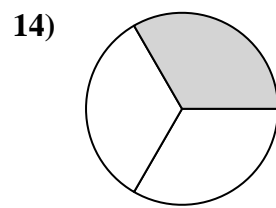
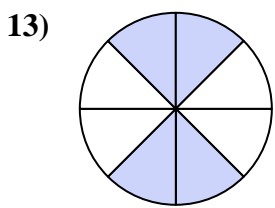
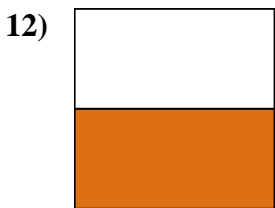
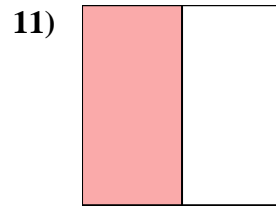
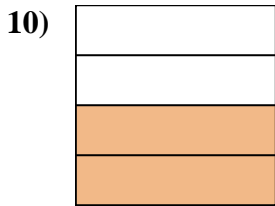
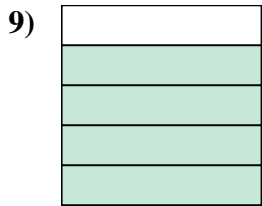
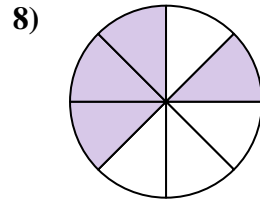
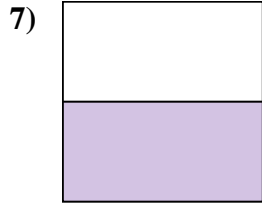
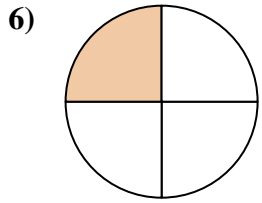
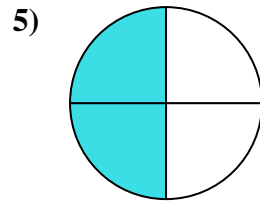
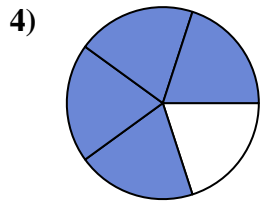
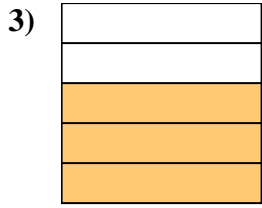
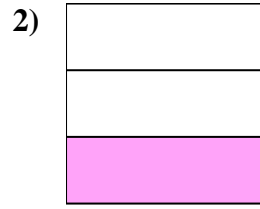
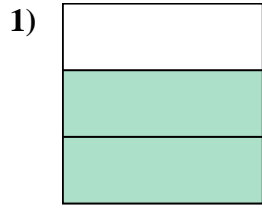
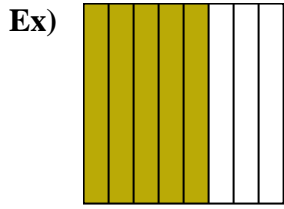
12. _____

13. _____

14. _____



Write the shaded amount in word form.



Answers

Ex. five-eighths

1. two-thirds

2. one-third

3. three-fifths

4. four-fifths

5. two-fourths

6. one-fourth

7. one-half

8. four-eighths

9. four-fifths

10. two-fourths

11. one-half

12. one-half

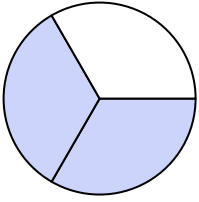
13. four-eighths

14. one-third




Write the shaded amount in word form.

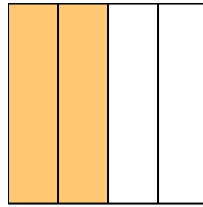
Ex)



1)



2)



Answers

Ex. two-thirds

1. _____

2. _____

3. _____

4. _____

5. _____

6. _____

7. _____

8. _____

9. _____

10. _____


11. _____

12. _____


13. _____

14. _____

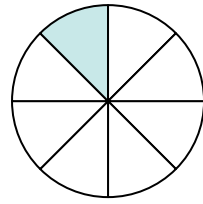
3)




4)




5)



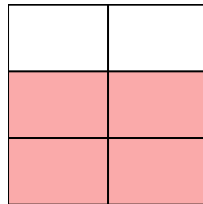
6)



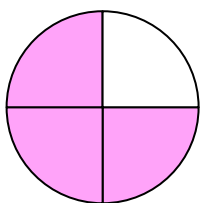
7)



8)



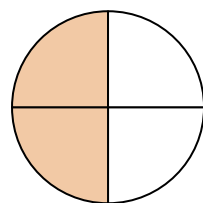
9)




10)



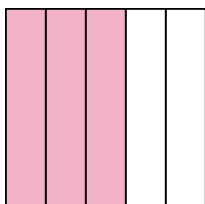
11)



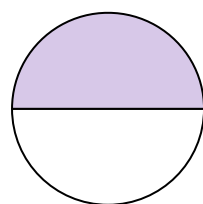
12)



13)



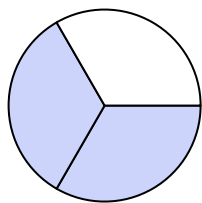
14)






Write the shaded amount in word form.

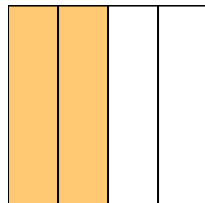
Ex)



1)



2)



Ex.

two-thirds

1.

one-third

2.

two-fourths

3.

one-half

4.

three-fifths

5.

one-eighth

6.

one-third

7.

five-eighths

8.

four-fifths

9.

three-fourths

10.

one-eighth

11.

two-fourths

12.

one-half


13.

three-fifths


14.

one-half

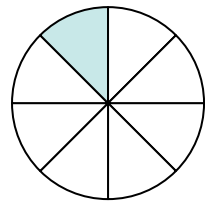
3)




4)




5)



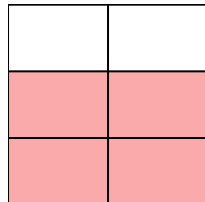
6)



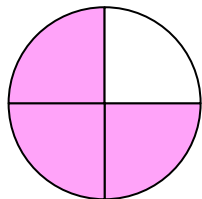
7)



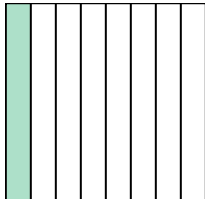
8)



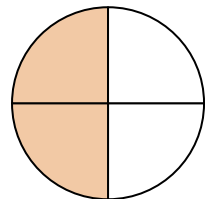
9)




10)



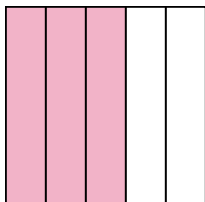
11)



12)



13)



14)

